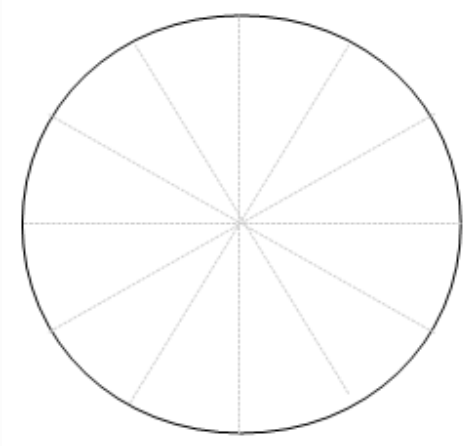


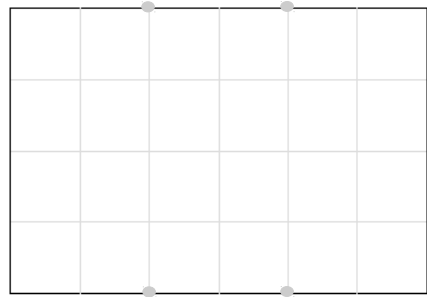
# Sixths

If you split a shape into  equal pieces,  
each piece is called a **sixth**.


This shows a **circle**  
divided into  sixths.



This shows a **rectangle**  
split into  sixths.

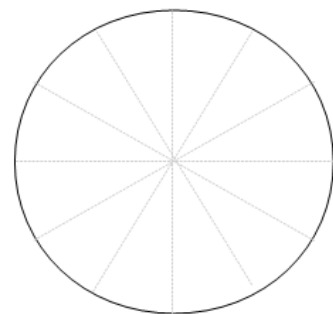


**One sixth** of this shape  
is **shaded**.



You **write** this as   $\frac{\quad}{\quad}$ .

**sixths** of this shape  
are **shaded**.



You **write** this as   $\frac{\quad}{\quad}$ .

