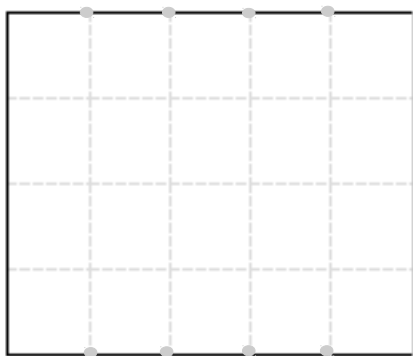


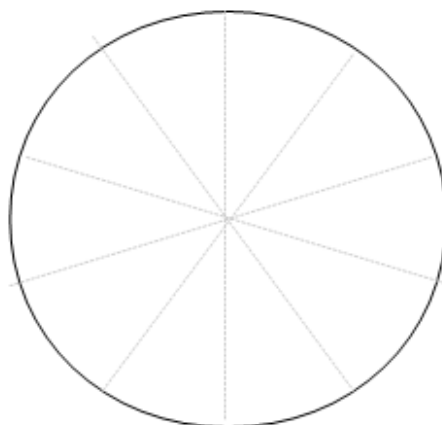
# Fifths

If you split a shape into  equal pieces,  
each piece is called a **fifth**.

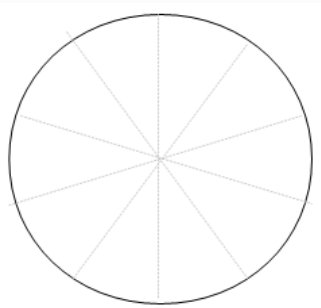
This shows a **rectangle**  
split into  fifths.



This shows a **circle**  
split into  fifths.




**One fifth** of this shape  
is **shaded**.



You **write** this as  .

**fifths** of this shape  
are **shaded**.



You **write** this as  .

