

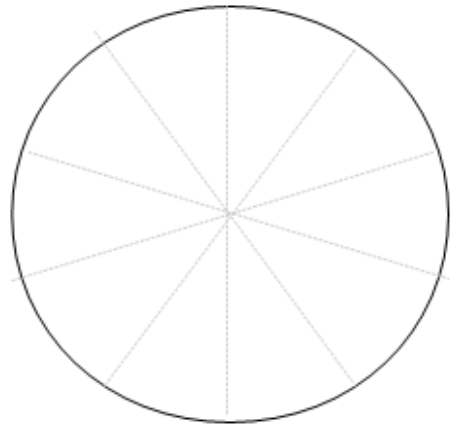
Tenths

If you split a shape into equal pieces,
each piece is called a **tenth**.

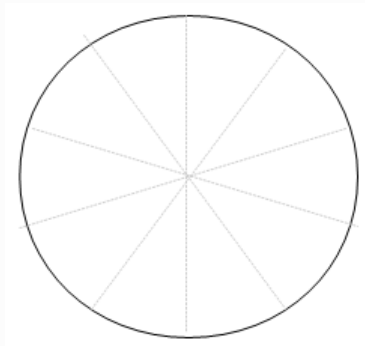
This shows a **rectangle**
split into tenths.



This shows a **circle**
divided into tenths.

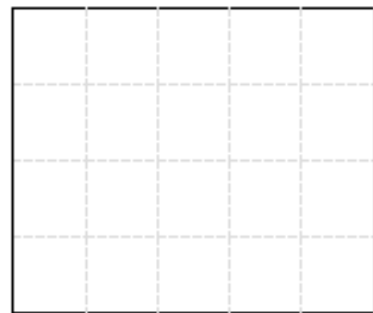


One tenth of this circle
is **shaded**.



You **write** this as .

tenths of this rectangle
are **shaded**.



You **write** this as .

